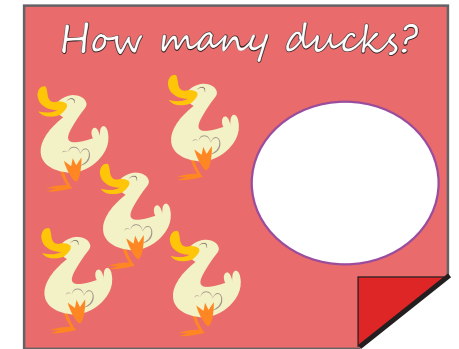


$$\begin{array}{c} \text{3 balls} \\ + \\ \text{4 balls} \\ = \end{array} \bigcirc$$

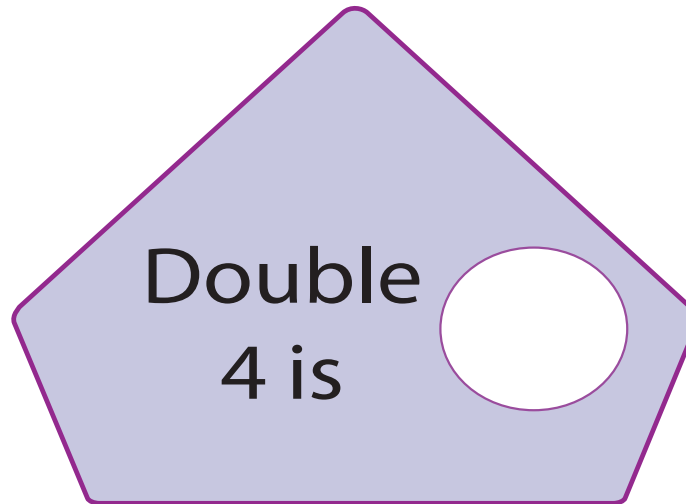
Name: \_\_\_\_\_



# BIG MATHS BEAT THAT!

Write these numbers in order


|                      |                      |                      |
|----------------------|----------------------|----------------------|
| 8                    | 2                    | 4                    |
| <input type="text"/> | <input type="text"/> | <input type="text"/> |



$$6 + \square = 10$$

|           |                 |
|-----------|-----------------|
| $3 + 6 =$ | Half of 8 is... |
|-----------|-----------------|





$$\begin{array}{c} \text{Candy cane} \\ \text{Candy cane} \end{array} + \begin{array}{c} \text{Candy cane} \\ \text{Candy cane} \\ \text{Candy cane} \end{array} = \bigcirc$$

Name: \_\_\_\_\_

How many pigs?

# BIG MATHS BEAT THAT!

Write these numbers in order

|                      |                      |                      |
|----------------------|----------------------|----------------------|
| 5                    | 2                    | 3                    |
| <input type="text"/> | <input type="text"/> | <input type="text"/> |

1 less than 5 is?


Double 2 is

$$3 + \square = 10$$


6 + 2 =

Half of 12 is...

4 take away 3 is...



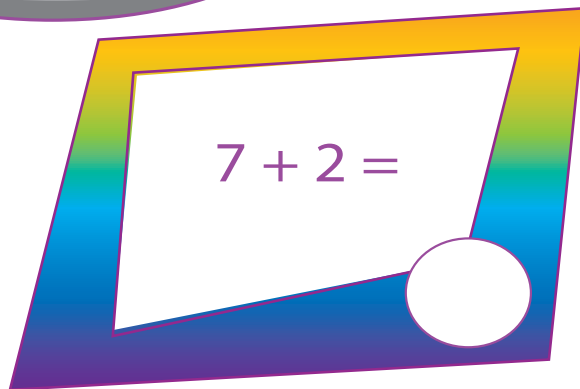
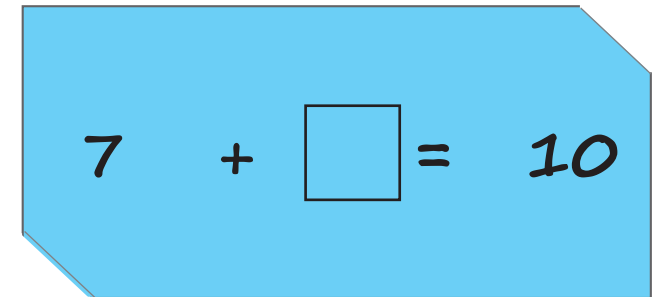
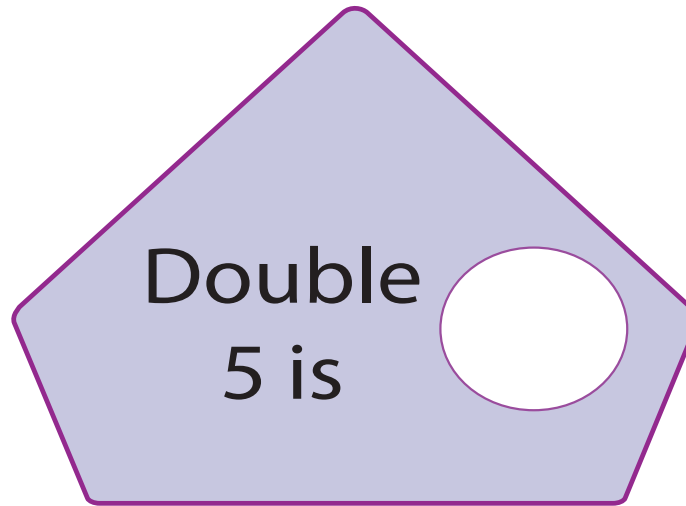
Name: \_\_\_\_\_





# BIG MATHS BEAT THAT!

Write these numbers in order

|   |   |   |
|---|---|---|
| 7 | 9 | 2 |
| □ | □ | □ |





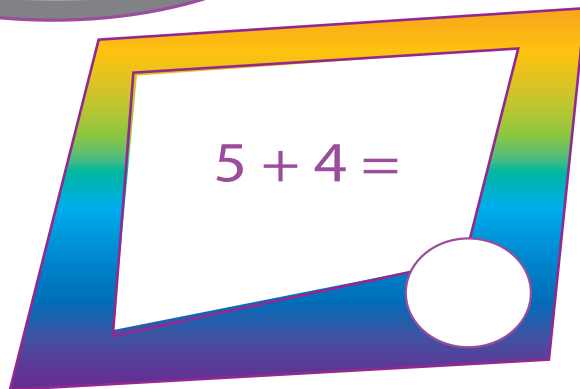
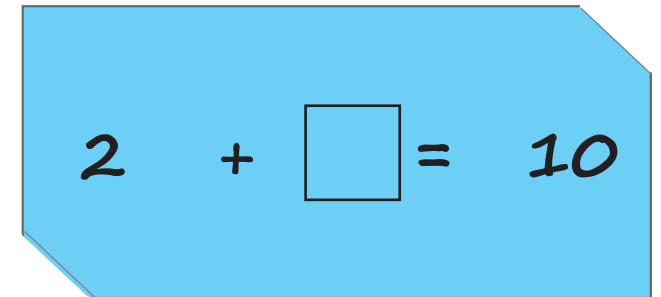
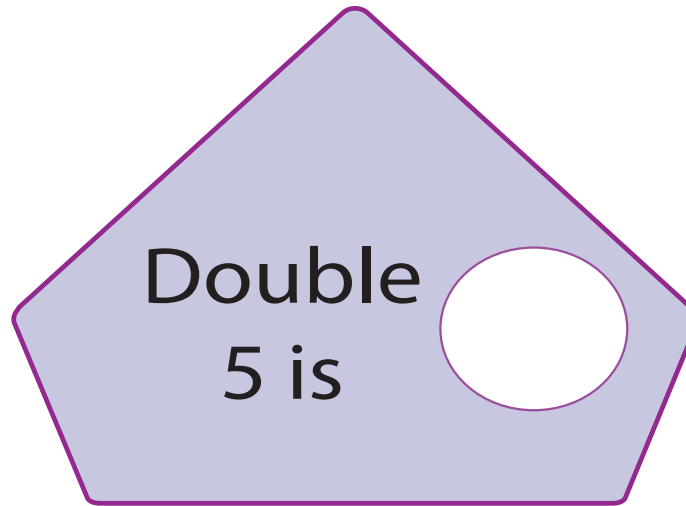
Name: \_\_\_\_\_




# BIG MATHS BEAT THAT!

Write these numbers in order

|                      |                      |                      |
|----------------------|----------------------|----------------------|
| 6                    | 4                    | 8                    |
| <input type="text"/> | <input type="text"/> | <input type="text"/> |





$$\begin{array}{c} \text{6 green worms} \\ + \\ \text{4 green worms} \\ = \end{array} \bigcirc$$

Name: \_\_\_\_\_

How many frogs?

# BIG MATHS BEAT THAT!

Write these numbers in order

|                      |                      |                      |
|----------------------|----------------------|----------------------|
| 2                    | 9                    | 1                    |
| <input type="text"/> | <input type="text"/> | <input type="text"/> |

1 more than 7 is?


Double 1 is

$$4 + \square = 10$$

$$6 + 3 =$$

Half of 14 is...

7 take away 4 is...



$$\begin{array}{c} \text{5 balloons} \\ + \\ \text{5 balloons} \\ = \end{array} \bigcirc$$

Name: \_\_\_\_\_

How many boys?

$\bigcirc$

# BIG MATHS BEAT THAT!

Write these numbers in order

|                      |                      |                      |
|----------------------|----------------------|----------------------|
| 8                    | 5                    | 7                    |
| <input type="text"/> | <input type="text"/> | <input type="text"/> |

1 less than 8 is?

$\bigcirc$

Double 4 is

$\bigcirc$

$$1 + \square = 10$$

5 + 3 =


$\bigcirc$

Half of 8 is...


$\bigcirc$

9 take away 8 is...

$\bigcirc$



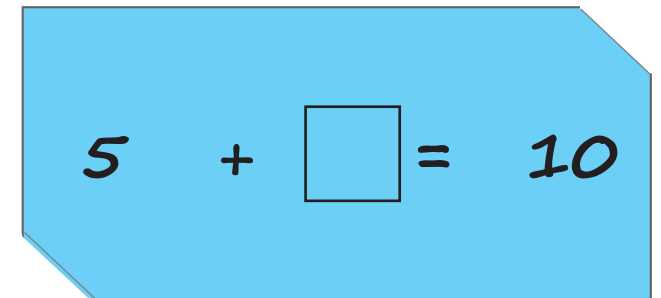
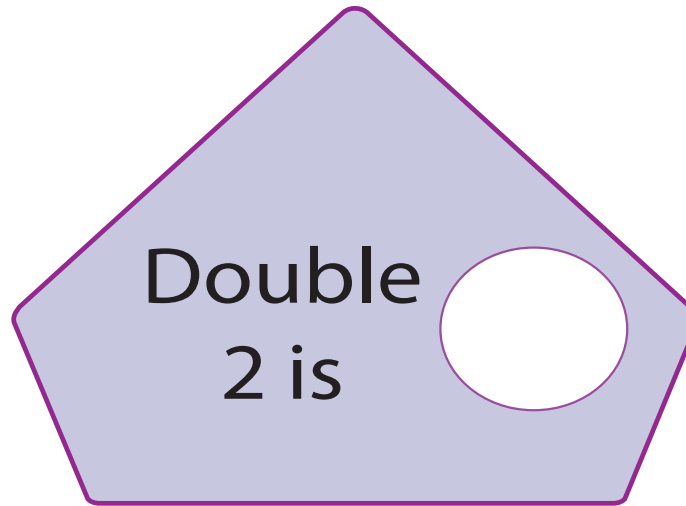
Name: \_\_\_\_\_




# BIG MATHS BEAT THAT!

Write these numbers in order

|                      |                      |                      |
|----------------------|----------------------|----------------------|
| 4                    | 3                    | 5                    |
| <input type="text"/> | <input type="text"/> | <input type="text"/> |





$$\begin{array}{c} \text{Monkey} \quad \text{Monkey} \\ \text{Monkey} \quad \text{Monkey} \end{array} + \begin{array}{c} \text{Monkey} \quad \text{Monkey} \\ \text{Monkey} \quad \text{Monkey} \end{array} = \bigcirc$$

Name: \_\_\_\_\_

How many cats?

9

# BIG MATHS BEAT THAT!

Write these numbers in order

|                      |                      |                      |
|----------------------|----------------------|----------------------|
| 7                    | 1                    | 6                    |
| <input type="text"/> | <input type="text"/> | <input type="text"/> |

1 less than 6 is?



Double 5 is

$$8 + \square = 10$$


4 + 5 =

Half of 8 is...

10 take away 3 is...



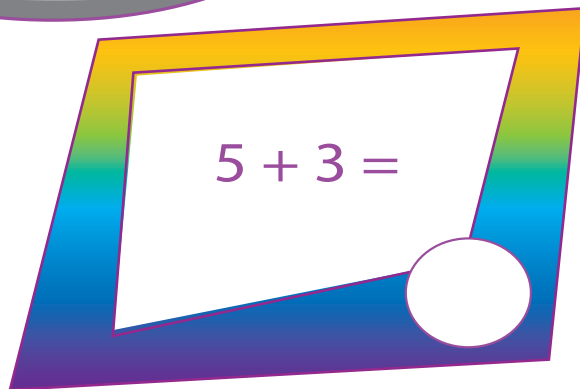
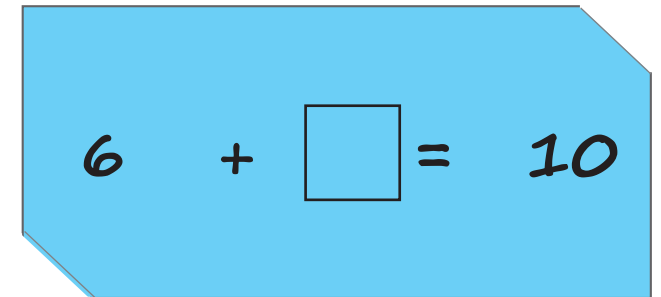
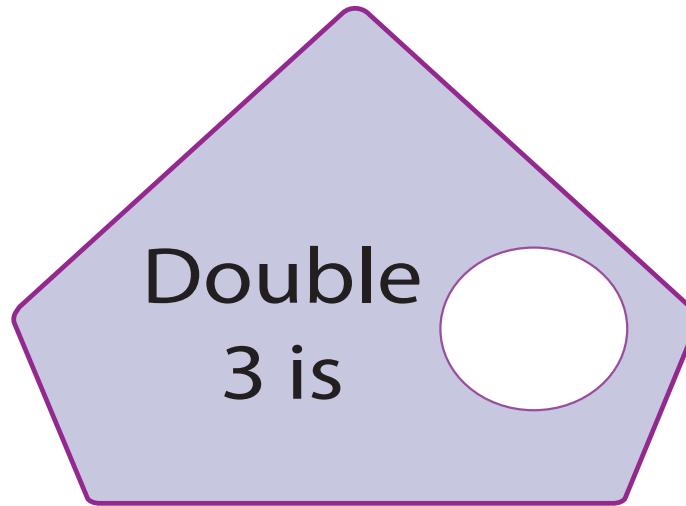
Name: \_\_\_\_\_




# BIG MATHS BEAT THAT!


Write these numbers in order

|                      |                      |                      |
|----------------------|----------------------|----------------------|
| 6                    | 4                    | 5                    |
| <input type="text"/> | <input type="text"/> | <input type="text"/> |





Name: \_\_\_\_\_



# BIG MATHS BEAT THAT!

Write these numbers in order

|                      |                      |                      |
|----------------------|----------------------|----------------------|
| 7                    | 9                    | 2                    |
| <input type="text"/> | <input type="text"/> | <input type="text"/> |

$$9 + \square = 10$$

1 less than 9 is?

Double 1 is

8 take away 6 is...

$$3 + 5 =$$

Half of 12 is...