

Write out the fact family for:

$8 + 6 = 14$

Name: _____

$30 + 40 =$

BIG MATHS BEAT THAT!

Draw a ring around the **odd** numbers

46 71 19 8

$3 \times 4 =$

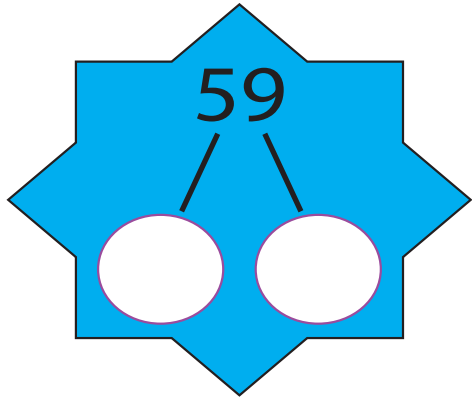
Double 9 is

$36 + \square = 40$

$36 + 7 =$

$65 - 7 =$

Half of 16 is...



Write out the fact family for:

$3 + 8 = 11$

Name: _____

60 + 20 =

BIG MATHS BEAT THAT!

Draw a ring around the **even** numbers

35 64 79 12

$3 \times 6 =$

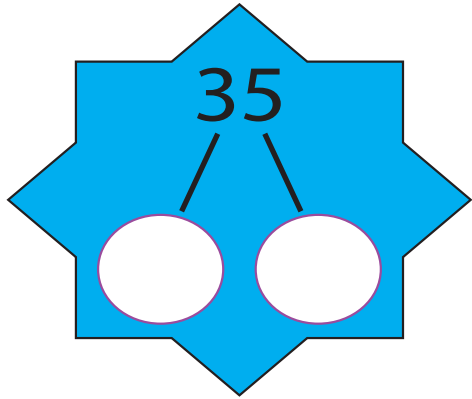
Double 7 is

$25 + \square = 30$

$45 + 6 =$

$56 - 8 =$

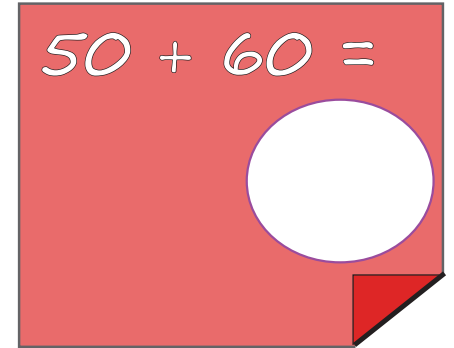
Half of 18 is...



Write out the fact family for:

$5 + 7 = 12$

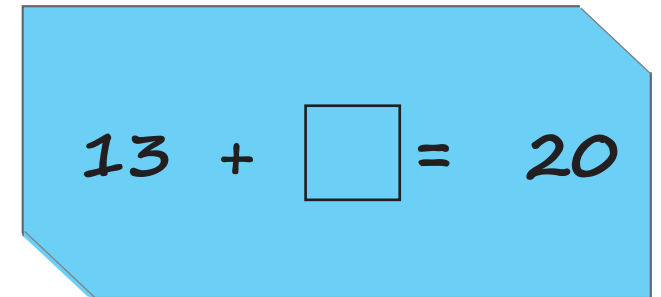
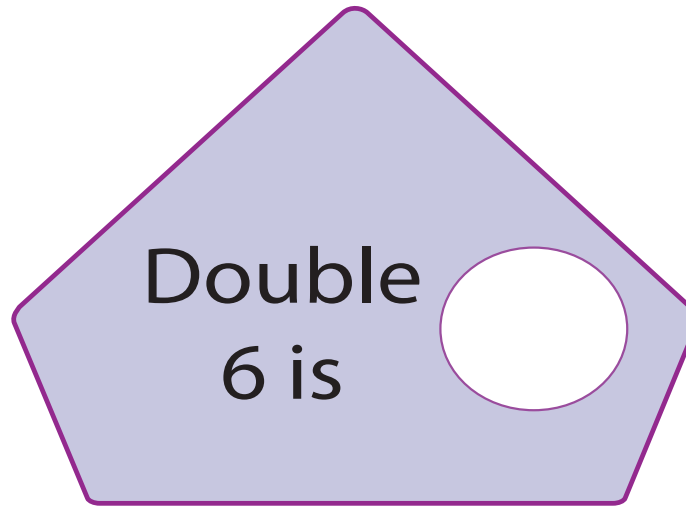
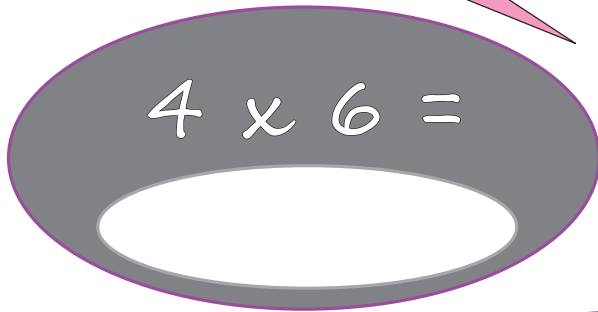
Name: _____

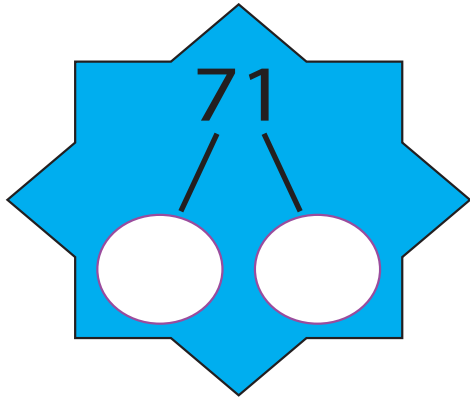


BIG MATHS BEAT THAT!

Draw a ring around the **odd** numbers

10 81 7 92





Write out the fact family for:

$7 + 8 = 15$

Name: _____

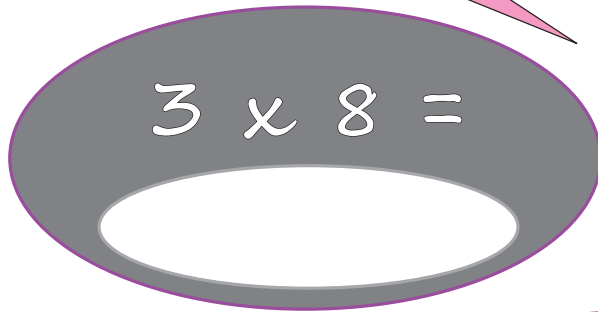
$70 + 40 =$



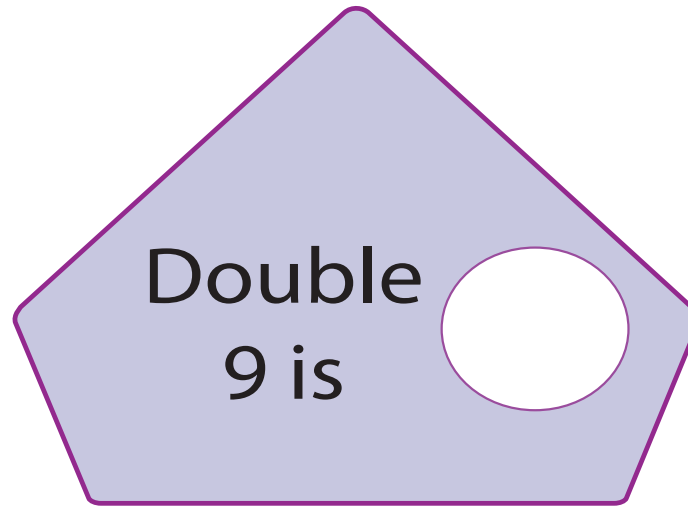
BIG MATHS BEAT THAT!

Draw a ring around the **even** numbers

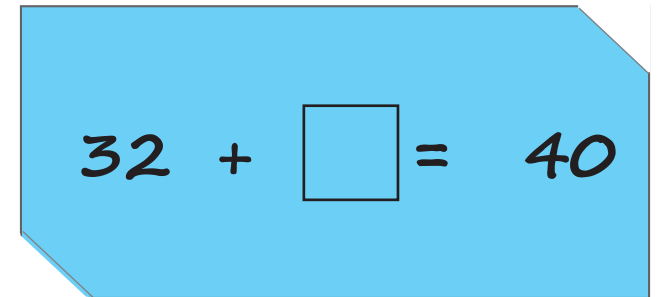
43 12 66 39



$3 \times 8 =$



Double 9 is



$32 + \square = 40$

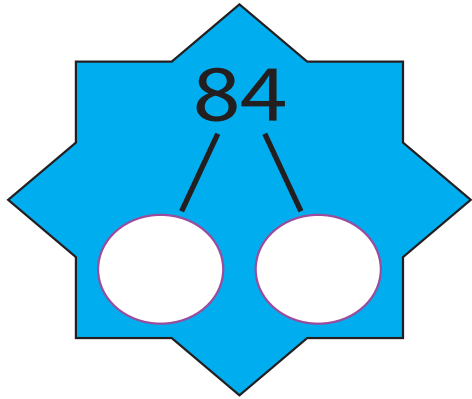


Half of 12 is...



$63 + 8 =$

$71 - 5 =$



Write out the fact family for:

$8 + 9 = 17$

Name: _____

$40 + 40 =$

BIG MATHS BEAT THAT!

Draw a ring around the **odd** numbers

97 45 68 5

$4 \times 4 =$

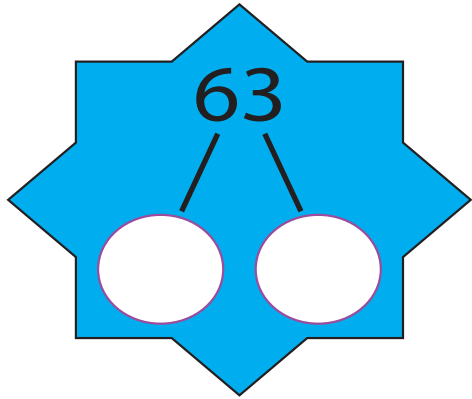
Double 10 is

$74 + \square = 80$

$66 + 8 =$

$42 - 7 =$

Half of 16 is...



Write out the fact family for:

$9 + 5 = 14$

Name: _____

$90 + 30 =$

BIG MATHS BEAT THAT!

Draw a ring around the **even** numbers

52 33 46 70

$3 \times 3 =$

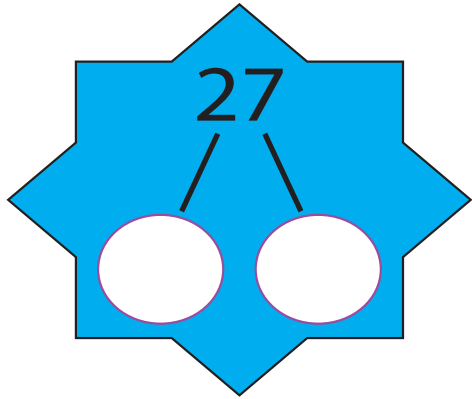
Double 8 is

$31 + \square = 40$

$86 + 5 =$

$43 - 6 =$

Half of 20 is...



Write out the fact family for:

$6 + 9 = 15$

Name: _____

$20 + 90 =$

BIG MATHS BEAT THAT!

Draw a ring around the **odd** numbers

71 28 6 49

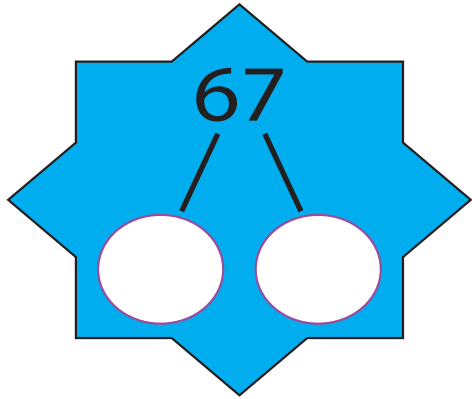
$3 \times 6 =$

Double 7 is

$86 + \square = 90$

$59 + 3 =$ $64 - 7 =$

Half of 18 is...



Write out the fact family for:

$4 + 7 = 11$

Name: _____

$40 + 50 =$

BIG MATHS BEAT THAT!

Draw a ring around the **odd** numbers

16 73 99 60

$3 \times 7 =$

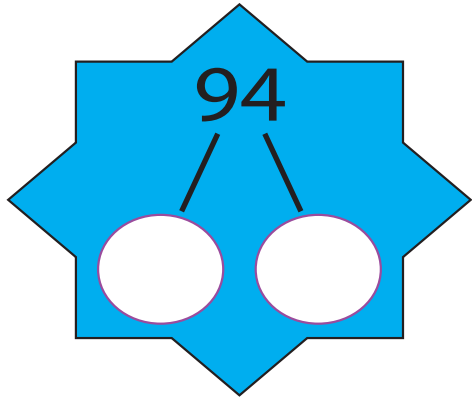
Double 9 is

$52 + \square = 60$

$25 + 9 =$

$83 - 5 =$

Half of 12 is...



Write out the fact family for:

$5 + 8 = 13$

Name: _____

$60 + 30 =$

BIG MATHS BEAT THAT!

Draw a ring around the **odd** numbers

55 20 7 63

$4 \times 3 =$

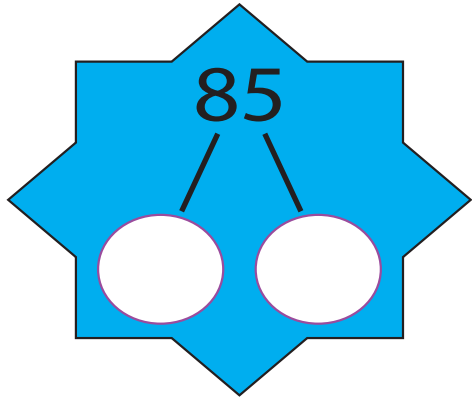
Double 6 is

$33 + \square = 40$

$46 + 6 =$

$52 - 4 =$

Half of 14 is...



Write out the fact family for:

$8 + 4 = 12$

Name: _____

$90 + 30 =$

BIG MATHS BEAT THAT!

Draw a ring around the **even** numbers

24 75 40 13

$6 \times 3 =$

Double 8 is

$65 + \square = 70$

$94 + 7 =$

$31 - 8 =$

Half of 18 is...