

Write out the fact family for:

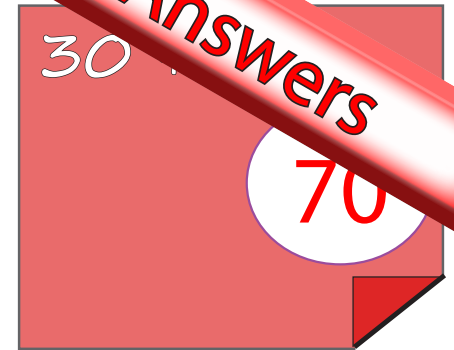
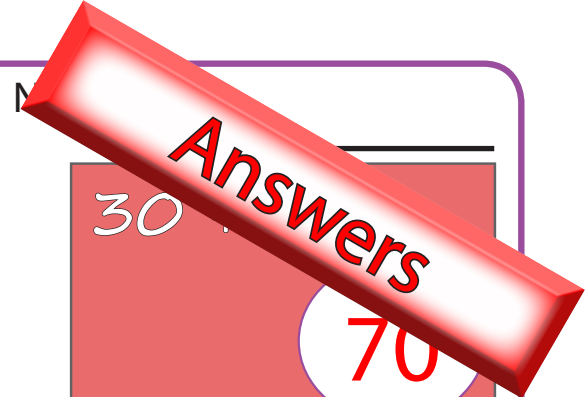
$$8 + 6 = 14$$

$$14 - 6 = 8$$

$$6 + 8 = 14$$

$$14 - 8 = 6$$

BIG MATHS BEAT THAT!



Draw a ring around the **odd** numbers

46 71 19 8

$3 \times 4 =$
12

Double 9 is **18**

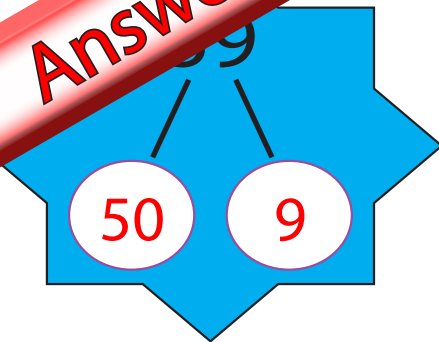
$36 + 4 = 40$

$36 + 7 =$
43

$65 - 7 =$
58

Half of 16 is...
8

Answers



Write out the fact family for:

$3 + 8 = 11$	$11 - 3 = 8$
$8 + 3 = 11$	$11 - 8 = 3$

Name: _____

$60 + 20 =$

80

BIG MATHS BEAT THAT!

Draw a ring around the **even** numbers

35 64 79 12

$25 + 5 = 30$

$3 \times 6 =$

18

Double 7 is

14

Half of 18 is...

9

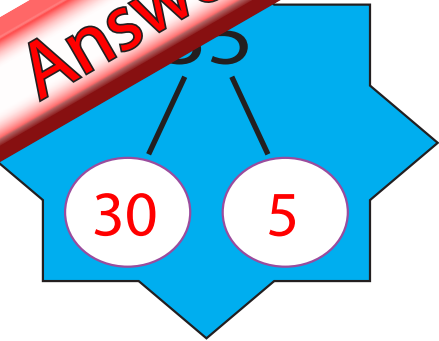
$45 + 6 =$

51

$56 - 8 =$

48

Answers



Write out the fact family for:

$5 + 7 = 12$

$12 - 7 = 5$

$7 + 5 = 12$

$12 - 5 = 7$

Name: _____

$$50 + 60 =$$

110

BIG MATHS BEAT THAT!

Draw a ring around the **odd** numbers

10 81 7 92

$$4 \times 6 =$$

24

Double 6 is

12

$$13 + 7 = 20$$

Half of 14 is...

7

$$57 + 9 =$$

66

$$34 - 7 =$$

27

Answers

70

1

Write out the fact family for:

$7 + 8 = 15$

$15 - 7 = 8$

$8 + 7 = 15$

$15 - 8 = 7$

Name: _____

$70 + 40 =$

110

BIG MATHS BEAT THAT!

Draw a ring around the **even** numbers

43

12

66

39

$3 \times 8 =$

24

Double 9 is

18

$32 + 8 = 40$

Half of 12 is...

6

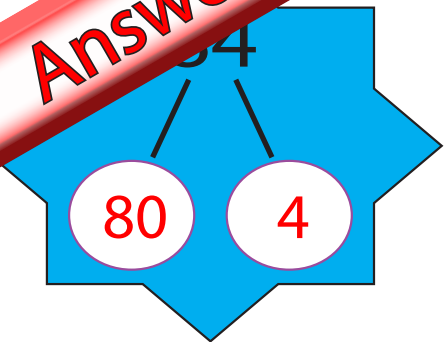
$63 + 8 =$

71

$71 - 5 =$

66

Answers



Write out the fact family for:

$8 + 9 = 17$	$17 - 9 = 8$
$9 + 8 = 17$	$17 - 8 = 9$

Name: _____

$40 + 40 =$

80

BIG MATHS BEAT THAT!

Draw a ring around the **odd** numbers

97 45 68 5

$74 + 6 = 80$

$4 \times 4 =$

16

Double 10 is

20

Half of 16 is...

8

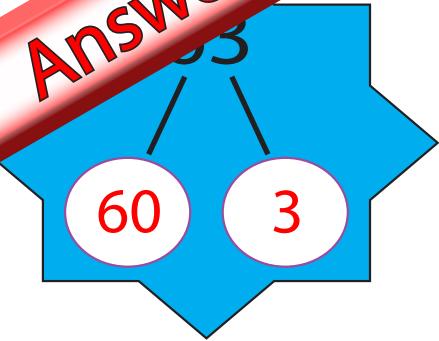
$66 + 8 =$

74

$42 - 7 =$

35

Answers



Write out the fact family for:

$9 + 5 = 14$

$14 - 5 = 9$

$5 + 9 = 14$

$14 - 9 = 5$

Name: _____

$90 + 30 =$

120

BIG MATHS BEAT THAT!

Draw a ring around the **even** numbers

52 33 46 70

$3 \times 3 =$

9

Double 8 is

16

$31 + 9 = 40$

Half of 20 is...

10

$86 + 5 =$

91

$43 - 6 =$

37

Answers

20

7

Write out the fact family for:

$6 + 9 = 15$

$15 - 6 = 9$

$9 + 6 = 15$

$15 - 9 = 6$

Name: _____

$20 + 90 =$

110

BIG MATHS BEAT THAT!

Draw a ring around the **odd** numbers

71

28

6

49

$3 \times 6 =$

18

Double 7 is

14

$86 + 4 = 90$

$59 + 3 =$

62

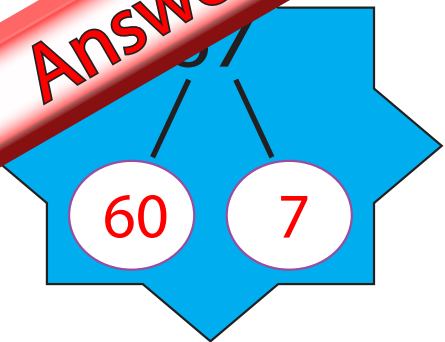
$64 - 7 =$

57

Half of 18 is...

9

Answers



Write out the fact family for:

$4 + 7 = 11$	$11 - 4 = 7$
$7 + 4 = 11$	$11 - 7 = 4$

Name: _____

$40 + 50 =$

90

BIG MATHS BEAT THAT!

Draw a ring around the **odd** numbers

16 73 99 60

$52 + 8 = 60$

$3 \times 7 =$

21

Double 9 is 18

Half of 12 is...

6

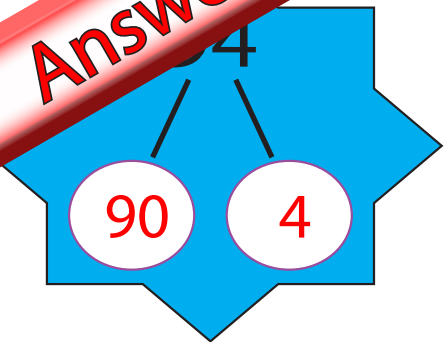
$25 + 9 =$

34

$83 - 5 =$

78

Answers



Write out the fact family for:

$5 + 8 = 13$	$13 - 5 = 8$
$8 + 5 = 13$	$13 - 8 = 5$

Name: _____

$60 + 30 =$

90

BIG MATHS BEAT THAT!

Draw a ring around the **odd** numbers

55 20 7 63

$33 + 7 = 40$

$4 \times 3 =$

12

Double 6 is

12

Half of 14 is...

7

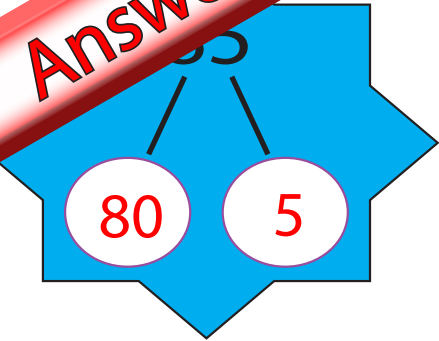
$46 + 6 =$

52

$52 - 4 =$

48

Answers



Write out the fact family for:

$8 + 4 = 12$

$12 - 4 = 8$

$4 + 8 = 12$

$12 - 8 = 4$

Name: _____

$90 + 30 =$

120

BIG MATHS BEAT THAT!

Draw a ring around the **even** numbers

24 75 40 13

$6 \times 3 =$

18

Double 8 is

16

$65 + 5 = 70$

Half of 18 is...

9

$94 + 7 =$

101

$31 - 8 =$

23