

Answers

Week One



$$3 + 4 = 7$$



BIG MATHS BEAT THAT!

Write these numbers in order

8	2	4
2	4	8

One more than 3 is?

4

Double 4 is

8

$$6 + 4 = 10$$

3 + 6 =

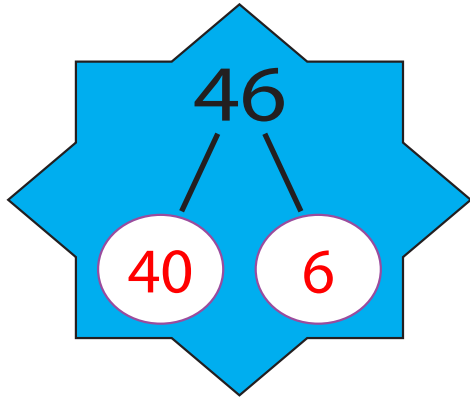
9

Half of 8 is...

4

5 take away 3 is...

2



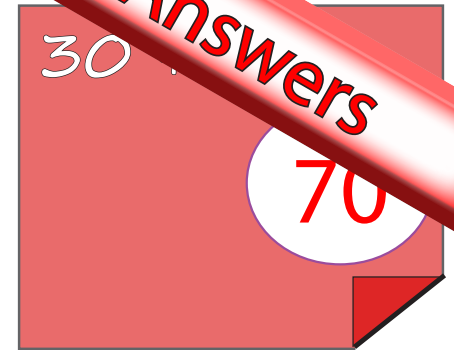
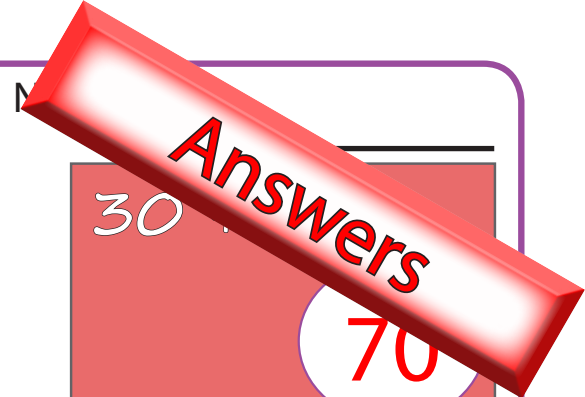
Write out the fact family for:

$$8 + 6 = 14$$

$$14 - 6 = 8$$

$$6 + 8 = 14$$

$$14 - 8 = 6$$



BIG MATHS BEAT THAT!

Draw a ring around the **odd** numbers

46 71 19 8

$$36 + 4 = 40$$

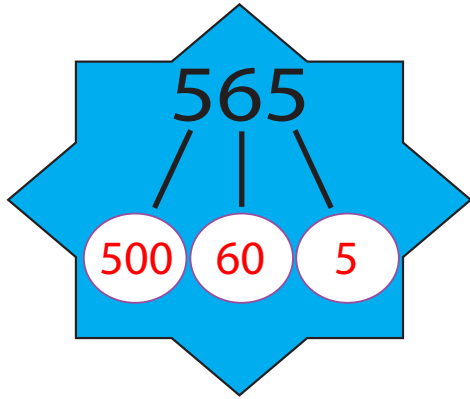
$$3 \times 4 = 12$$

Double 9 is **18**

Half of 16 is... **8**

$$36 + 7 = 43$$

$$65 - 7 = 58$$



Write out the
fact family
for:

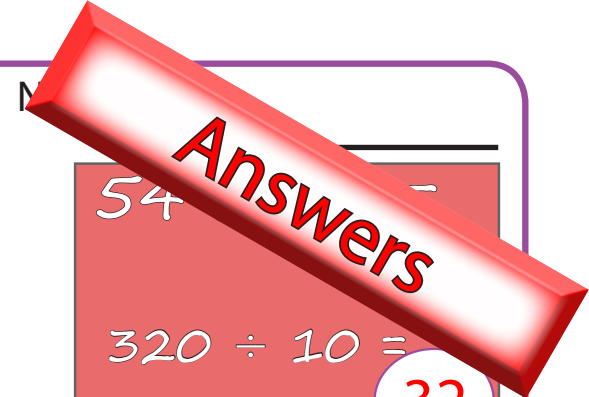
$13 + 68 = 81$

$81 - 13 = 68$

$68 + 13 = 81$

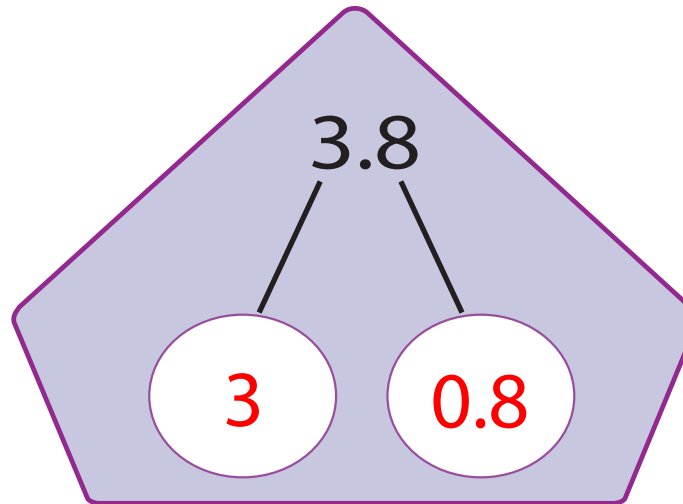
$81 - 68 = 13$

BIG MATHS BEAT THAT!



54
 $320 \div 10 =$
32

$73 \div 5 = 14r3$



$36 + 64 = 100$

$30 \times 80 =$

2400

$456 + 278 =$

734

$312 - 149 =$

163

$45 \times 5 =$
 225

Answers

$$1.625$$

4 0.6 0.02 0.005

$$\frac{1}{4}$$

fraction

=

$$0.25$$

decimal

=

$$25\%$$

percentage

Name: _____

$$28 \times 100 =$$

$$2800$$

$$715 \div 10 =$$

$$71.5$$

BIG MATHS BEAT THAT!

Write a square number between 10 and 30

16
or
25

$$35 \times 28 =$$

$$980$$

$$348 + 652 = 1000$$

$$500 \div 7 =$$

$$71 \text{ r } 3$$

$$2.3 \times 4 =$$

$$9.2$$

$$2.68 + 1.35 =$$

$$4.03$$

$$4.32 - 1.79 =$$

$$2.53$$

Answers

$$5.3 \div 8 =$$

5.3

$$\frac{2}{5}$$

fraction

=

$$0.4$$

decimal

=

$$40\%$$

percentage

Name: _____

$3.07 \times 1000 =$
3070

$53.6 \div 1000 =$
0.0536

BIG MATHS BEAT THAT!

Write these numbers in order...

- 1.3
- 1.113
- 1.31
- 1.13

- 1.31
- 1.3
- 1.13
- 1.113

$$651 \div 21 =$$

31

$$619 \times 77 =$$

47663

$$3.4 + 6.6 = 10$$

$$45.7 + 8.68 =$$


54.38

$$4.2 - 1.32 =$$

2.88

$$4.78 \times 7 =$$

33.46



Week Two


Answers

8


$$3 + 3 = 6$$

Name: _____

How many pigs?



4

BIG MATHS BEAT THAT!

Write these numbers in order

5

2

3

2

3

5

1 less than 5
is?

4

Double
2 is

4

$$3 + 7 = 10$$

$$6 + 2 =$$

8

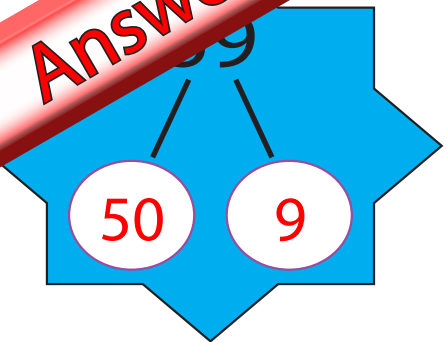
Half of 12 is...

6

4 take away
3 is...

1

Answers



Write out the fact family for:

$3 + 8 = 11$

$11 - 3 = 8$

$8 + 3 = 11$

$11 - 8 = 3$

Name: _____

$60 + 20 =$

80

BIG MATHS BEAT THAT!

Draw a ring around the **even** numbers

35 64 79 12

$25 + 5 = 30$

$3 \times 6 =$

18

Double 7 is 14

Half of 18 is...

9

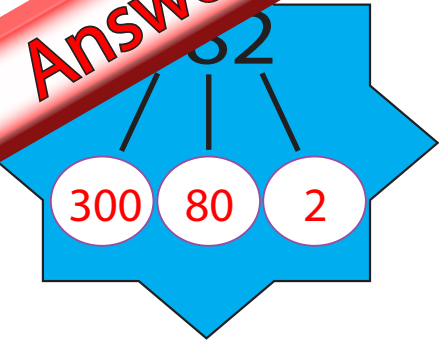
$45 + 6 =$

51

$56 - 8 =$

48

Answers



Write out the fact family for:

$63 \times 14 = 882$

$882 \div 14 = 63$

$14 \times 63 = 882$

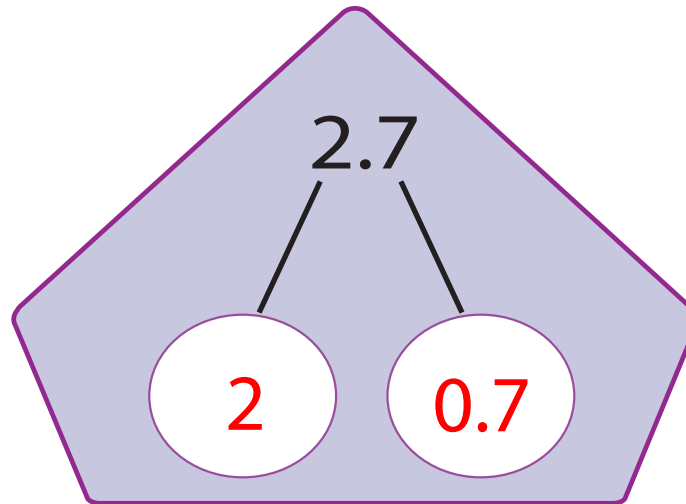
$882 \div 63 = 14$

Name: _____

$47 \times 10 = 470$
 $450 \div 10 = 45$

BIG MATHS BEAT THAT!

$49 \div 3 = 16 \text{ r } 1$



$63 + 37 = 100$

$50 \times 40 =$

2000

$528 + 354 =$

882

$425 - 297 =$

128

$34 \times 3 = 102$

Answers

$$3.818$$

3 0.8 0.01 0.008

$$\frac{1}{2} = 0.5 = 50\%$$

fraction decimal percentage

Name: _____

$$28 \times 100 = 2800$$
$$715 \div 10 = 71.5$$

BIG MATHS BEAT THAT!

Write three factors of 24...

1,2,3

4,6,8

12,24

$$68 \times 19 =$$

1292

$$675 + 325 = 1000$$

$$410 \div 6 =$$

68 r 2

$$4.5 \times 7 = 31.5$$

$$5.92 + 4.82 =$$

10.74

$$2.44 - 1.55 =$$

0.89

Answers

$5 \div 6 =$

5.6

$\frac{4}{5} =$

fraction

=

$0.8 =$

decimal

=

80%

percentage

BIG MATHS BEAT THAT!

Name: _____

$5.32 \times 1000 =$

5320

$81.1 \div 1000 =$

0.0811

Write these numbers in order...

2.88

8.2

8.822

8.28

8.822

8.28

8.2

2.88

$169 \div 13 =$

13

$381 \times 29 =$

11049

$43.5 + 56.5 = 100$

$6.8 + 20.68 =$


27.48

$16.4 - 8.87 =$

7.53

$2.38 \times 3 =$

7.14



Week Three

Answers

4

 +  = 5

Name: _____

How many hearts?



6

BIG MATHS BEAT THAT!

Write these numbers in order

7	9	2
2	7	9

1 more than 4 is?

5

Double 5 is

10

$7 + 3 = 10$

$7 + 2 =$

9

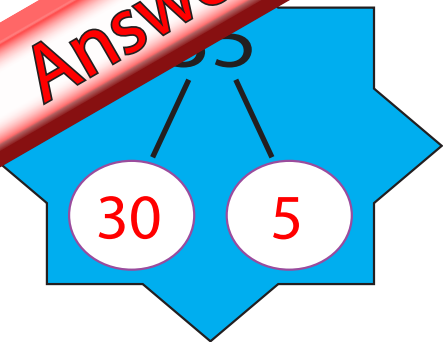
Half of 14 is...

7

5 take away 1 is...

4

Answers



Write out the fact family for:

$5 + 7 = 12$

$12 - 7 = 5$

$7 + 5 = 12$

$12 - 5 = 7$

Name: _____

$50 + 60 =$
110

BIG MATHS BEAT THAT!

Draw a ring around the **odd** numbers

10 81 7 92

$4 \times 6 =$
24

Double 6 is 12

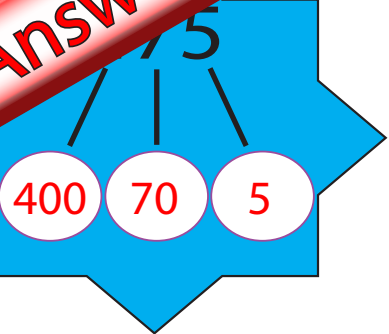
$13 + 7 = 20$

$57 + 9 =$
66

$34 - 7 =$
27

Half of 14 is...
7

Answers



Write out the fact family for:

$67 + 24 = 91$

$91 - 24 = 67$

$24 + 67 = 91$

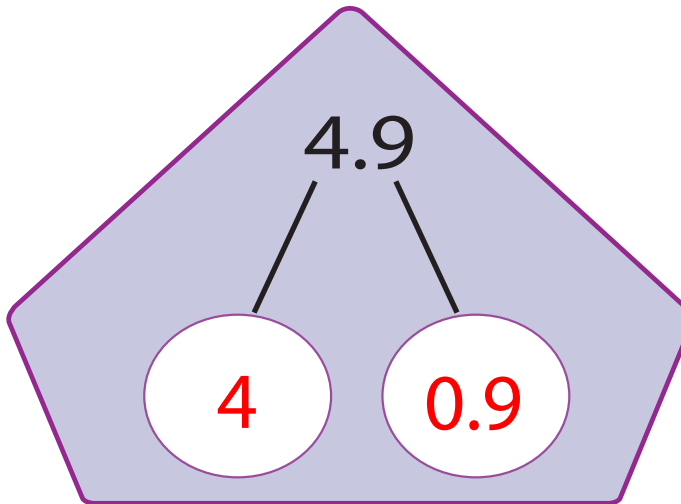
$91 - 67 = 24$

Name: _____

$$\begin{array}{r} 67 \times 10 = \\ \hline 670 \\ 730 \div 10 = \\ \hline 73 \end{array}$$

BIG MATHS BEAT THAT!

$67 \div 4 = 16 \text{ r } 3$



$42 + 58 = 100$

$70 \times 30 =$

2100

$627 + 283 =$

910

$571 - 189 =$

382

$56 \times 4 = 224$

Answers



$$\frac{1}{10} = 0.1 = 10\%$$

fraction decimal percentage

Name: _____

$$16 \times 100 = 1600$$
$$462 \div 10 = 46.2$$

BIG MATHS BEAT THAT!

Write a multiple of 8 between 20 and 35

24
or
32

$$730 \div 8 = 91 \text{ r } 2$$

$$52 \times 72 = 3744$$

$$289 + 711 = 1000$$

$$7.82 + 7.96 = 15.78$$

$$5.45 - 2.67 = 2.78$$

$$7.6 \times 3 = 22.8$$

Answers

$5 \div 4 =$

5.4

$\frac{3}{10}$

fraction

=

0.3

decimal

=

30%

percentage

Name: _____

$7.31 \times 1000 =$

7310

$7.6 \div 1000 =$

0.0076

BIG MATHS BEAT THAT!

Write these numbers in order...

4.54

4.5

4.454

4.45

4.54

4.454

4.45

4.5

4.45

$672 \div 32 =$

21

$844 \times 91 =$

76804

$6.7 + 3.3 = 10$

$35.9 + 3.77 =$

39.67

$11.26 - 6.8 =$

4.46

$4.17 \times 6 =$

25.02

Answers

Week Four

Answers

9

$$6 + 6 = 10$$

Name: _____

How many stars?

3

BIG MATHS BEAT THAT!

Write these numbers in order

6	4	8
4	6	8

$$2 + 8 = 10$$

1 less than 7 is?

6

Double 5 is

10

9 take away 6 is...

3

5 + 4 =

9

Half of 8 is...

4

Answers

70

1

Write out the fact family for:

$7 + 8 = 15$

$15 - 7 = 8$

$8 + 7 = 15$

$15 - 8 = 7$

Name: _____

$70 + 40 =$

110

BIG MATHS BEAT THAT!

Draw a ring around the **even** numbers

43

12

66

39

$3 \times 8 =$

24

Double 9 is

18

$32 + 8 = 40$

$63 + 8 =$

71

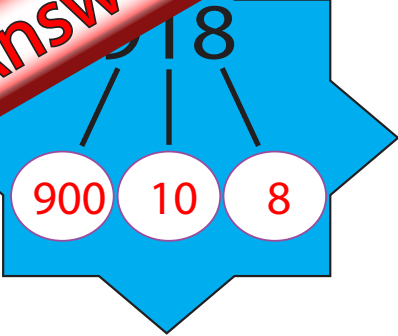
$71 - 5 =$

66

Half of 12 is...

6

Answers



Write out the fact family for:

$24 \times 17 = 408$

$408 \div 24 = 17$

$17 \times 24 = 408$

$408 \div 17 = 24$

Name: _____

$$29 \times 10 = 290$$
$$810 \div 10 = 81$$

BIG MATHS BEAT THAT!

$81 \div 5 = 16 \text{ r } 1$

$50 \times 60 =$

3000

6.5

6

0.5

$81 + 19 = 100$

$218 + 354 =$

572

$604 - 265 =$

339

$93 \times 5 = 465$

Answers

5.517

5

0.5

0.01

0.007

$\frac{3}{4}$

fraction

=

0.75

decimal

=

75%

percentage

Name: _____

$$77 \times 100 =$$

7700

$$371 \div 10 =$$

37.1

BIG MATHS BEAT THAT!

Write a square
number
between 80
and 110

81
or
100

$$68 \times 84 =$$

5712

$$833 + 167 = 1000$$

$$298 \div 9 =$$

33 r 1

$$6.2 \times 8 =$$

49.6

$$4.38 + 8.88 =$$

13.26

$$7.24 - 3.68 =$$

3.56

L4
4

Answers

$5 \div 9 =$

5.2

$\frac{6}{10}$

fraction

=

0.6

decimal

=

60%

percentage

BIG MATHS BEAT THAT!

Name: _____

$7.33 \times 1000 =$

7330

$71.2 \div 1000 =$

0.0712

Write these numbers in order...

- 6.13
- 6.11
- 1.63
- 6.131

- 6.131
- 6.13
- 6.11
- 1.63

$864 \div 16 =$

54

$268 \times 43 =$

11524

$62.7 + 37.3 = 100$

$7.5 + 27.82 =$

35.32

$31.6 - 8.82 =$

22.78

$2.39 \times 5 =$

11.95

Answers

Week Five

Answers

5

$$5 + 4 = 9$$

Name: _____

How many frogs?

7

BIG MATHS BEAT THAT!

Write these numbers in order

2	9	1
1	2	9

1 more than 7 is?

8

Double 1 is

2

$$4 + 6 = 10$$

$$6 + 3 =$$

9

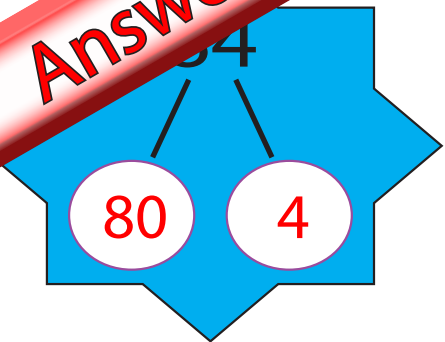
Half of 14 is...

7

7 take away 4 is...

3

Answers



Write out the fact family for:

$8 + 9 = 17$	$17 - 9 = 8$
$9 + 8 = 17$	$17 - 8 = 9$

Name: _____

$40 + 40 =$

80

BIG MATHS BEAT THAT!

Draw a ring around the **odd** numbers

97 45 68 5

$4 \times 4 =$

16

Double 10 is

20

$74 + 6 = 80$

$66 + 8 =$

74

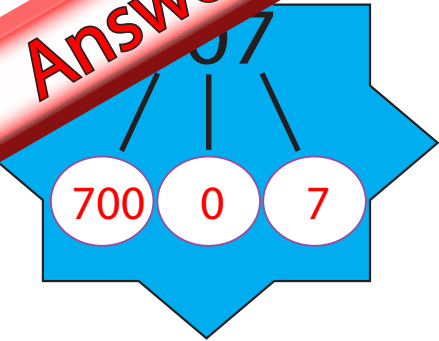
$42 - 7 =$

35

Half of 16 is...

8

Answers



Write out the fact family for:

$43 + 29 = 72$

$72 - 43 = 29$

$29 + 43 = 72$

$72 - 29 = 43$

Name: _____

$$\begin{array}{r} 87 \times 10 = \\ \hline 870 \end{array}$$
$$530 \div 10 = 53$$

BIG MATHS BEAT THAT!

$55 \div 3 = 18 \text{ r } 1$

$90 \times 20 =$

1800

3.2

3

0.2

$57 + 43 = 100$

$392 + 456 =$

848

$777 - 388 =$

389

$47 \times 6 =$

282

Answers

3.296

8 0.2 0.09 0.006

$\frac{1}{4}$ = 0.25 = 25%

fraction decimal percentage

Name: _____

$92 \times 100 = 9200$

$823 \div 10 = 82.3$

BIG MATHS BEAT THAT!

Write three factors of 32...

1,2,4 8,16 32

$71 \times 17 =$

1207

$265 + 735 = 1000$

$250 \div 3 =$

83 r 1

$3.5 \times 5 = 17.5$

$3.94 + 9.45 =$

13.39

$3.45 - 1.65 =$

1.8

Answers

$7.9 \div 3 =$

7.9

$\frac{8}{10}$

fraction

=

0.8

decimal

=

80%

percentage

Name: _____

$8.12 \times 1000 =$

8120

$40.1 \div 1000 =$

0.0401

BIG MATHS BEAT THAT!

Write these numbers in order...

7.39

7.779

7.97

7.79

7.97

7.79

7.779

7.39

$787 \times 35 =$

27545

$2.8 + 7.2 = 10$

$572 \div 26 =$

22

$95.7 + 11.11 =$


106.81

$7.8 - 4.87 =$

2.93

$9.81 \times 9 =$

88.29



Week Six

Answers

2

$$5 + 5 = 10$$

Name: _____

How many boys?

9

BIG MATHS BEAT THAT!

Write these numbers in order

8	5	7
5	7	8

1 less than 8 is?

7

Double 4 is

8

$$1 + 9 = 10$$

$$5 + 3 =$$

8

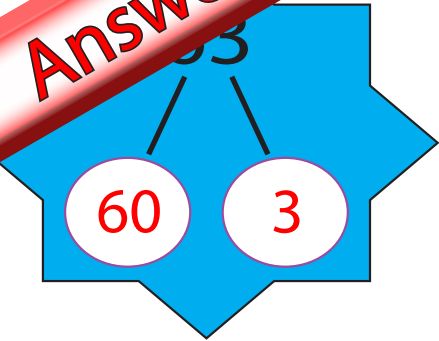
Half of 8 is...

4

9 take away 8 is...

1

Answers



Write out the fact family for:

$9 + 5 = 14$

$14 - 5 = 9$

$5 + 9 = 14$

$14 - 9 = 5$

Name: _____

$90 + 30 =$

120

BIG MATHS BEAT THAT!

Draw a ring around the **even** numbers

52 33 46 70

$3 \times 3 =$
9

Double 8 is 16

$31 + 9 = 40$

$86 + 5 =$

91

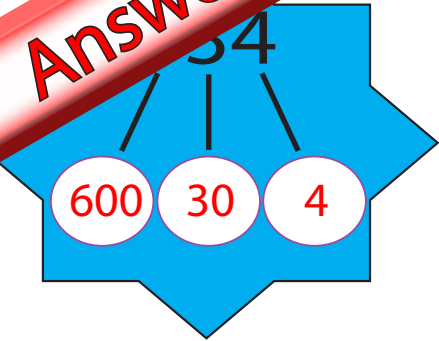
$43 - 6 =$

37

Half of 20 is...

10

Answers



Write out the fact family for:

$13 \times 15 = 195$

$195 \div 15 = 13$

$15 \times 13 = 195$

$195 \div 13 = 15$

Name: _____

$59 \times 10 = 590$
 $920 \div 10 = 92$

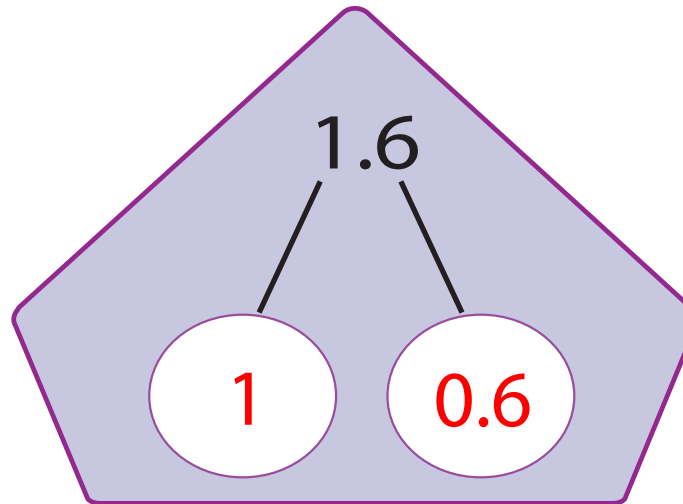
BIG MATHS BEAT THAT!

$51 \div 4 = 12 \text{ r } 3$

$36 + 64 = 100$

$30 \times 70 =$

2100



$483 + 427 =$

910

$834 - 457 =$

377

$85 \times 4 = 340$

Answers

7.484

7 0.4 0.08 0.004

$\frac{1}{2} = 0.5 = 50\%$

fraction decimal percentage

Name: _____

$29 \times 100 = 2900$

$343 \div 10 = 34.3$

BIG MATHS BEAT THAT!

Write a multiple of 6 between 40 and 55

42, 48 or 54

$89 \times 33 =$

2937

$478 + 522 = 1000$

$488 \div 5 =$

97 r 3

$6.68 + 4.49 =$

11.17

$5.23 - 2.97 =$

2.26

$7.7 \times 3 = 23.1$

Answers

7.7

$\frac{7}{10}$

fraction

=

0.7

decimal

=

70%

percentage

BIG MATHS BEAT THAT!

Name: _____

$$94.3 \times 1000 =$$

94300

$$7.7 \div 1000 =$$

0.0077

Write these numbers in order...

1.2 1.211

2.1 1.12

2.1

1.211

1.2

1.12

$$399 \div 19 =$$

21

$$911 \times 69 =$$

62859

$$81.1 + 18.9 = 100$$

$$8.3 + 37.53 =$$


45.83

$$35.5 - 7.63 =$$

27.87

$$5.09 \times 4 =$$

20.36



Week Seven

Answers

7.7


$$3 + 3 = 6$$

Name: _____

How many sheep?



5

BIG MATHS BEAT THAT!

Write these numbers in order

4

3

5

3

4

5

1 more than 6
is?

7

Double
2 is

4

$$5 + 5 = 10$$

$$2 + 5 =$$

7

Half of 12 is...

6

8 take away
3 is...

5

L1
7

Answers

20

7

Write out the fact family for:

$6 + 9 = 15$

$15 - 6 = 9$

$9 + 6 = 15$

$15 - 9 = 6$

Name: _____

$20 + 90 =$

110

BIG MATHS BEAT THAT!

Draw a ring around the **odd** numbers

71

28

6

49

$3 \times 6 =$

18

Double 7 is

14

$86 + 4 = 90$

$59 + 3 =$

62

$64 - 7 =$

57

Half of 18 is...

9

Answers

200 30 1

Write out the fact family for:

$37 + 47 = 84$

$84 - 37 = 47$

$47 + 37 = 84$

$84 - 47 = 37$

Name: _____

$$95 \times 10 = 950$$
$$740 \div 10 = 74$$

BIG MATHS BEAT THAT!

$96 \div 5 = 19 \text{ r } 1$

$30 \times 90 =$

2700

6.7

6

0.7

$17 + 83 = 100$

$577 + 324 =$

901

$764 - 585 =$

179

$48 \times 7 = 336$

Answers

9.466

9 0.4 0.06 0.006

$$\frac{1}{10} = 0.1 = 10\%$$

fraction decimal percentage

Name: _____

$$71 \times 100 = 7100$$
$$288 \div 10 = 28.8$$

BIG MATHS BEAT THAT!

Write a square number between 20 and 50

25, 36 or 49

$$331 \div 4 = 82 \text{ r } 3$$

$$74 \times 54 = 3996$$

$$563 + 437 = 1000$$

$$7.43 + 9.08 = 16.51$$

$$3.26 - 2.43 = 0.83$$

$$5.9 \times 9 = 53.1$$

Answers

$7.2 \div 7 =$

7.2

$\frac{2}{10}$

fraction

=

0.2

decimal

=

20%

percentage

BIG MATHS BEAT THAT!

Name: _____

$6.92 \times 1000 =$

6920

$71.3 \div 1000 =$

0.0713

Write these numbers in order...

7.676

7.07

6.707

6.06

7.676

6.707

6.06

7.07

7.676

7.07

6.707

6.06

$802 \times 19 =$

15238

$1.5 + 8.5 = 10$

$805 \div 35 =$

23

$26.35 + 8.9 =$

35.25

$5.77 - 2.8 =$

2.97

$2.16 \times 6 =$

12.96

Answers

Week Eight

Answers

9

$$4 + 4 = 8$$

Name: _____

How many cats?

8

BIG MATHS BEAT THAT!

Write these numbers in order

7	1	6
1	6	7

1 less than 6 is?

5

Double 5 is

10

$$8 + 2 = 10$$

$$4 + 5 =$$

9

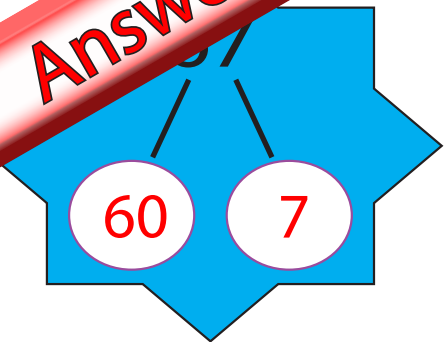
Half of 8 is...

4

10 take away 3 is...

7

Answers



Write out the fact family for:

$4 + 7 = 11$	$11 - 4 = 7$
$7 + 4 = 11$	$11 - 7 = 4$

Name: _____

$40 + 50 =$

90

BIG MATHS BEAT THAT!

Draw a ring around the **odd** numbers

16 73 99 60

$52 + 8 = 60$

$3 \times 7 =$

21

Double 9 is 18

Half of 12 is...

6

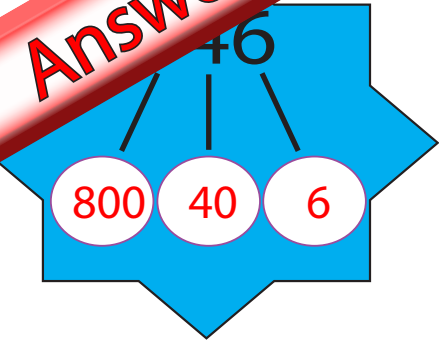
$25 + 9 =$

34

$83 - 5 =$

78

Answers



Write out the fact family for:

$38 \times 11 = 418$

$418 \div 11 = 38$

$11 \times 38 = 418$

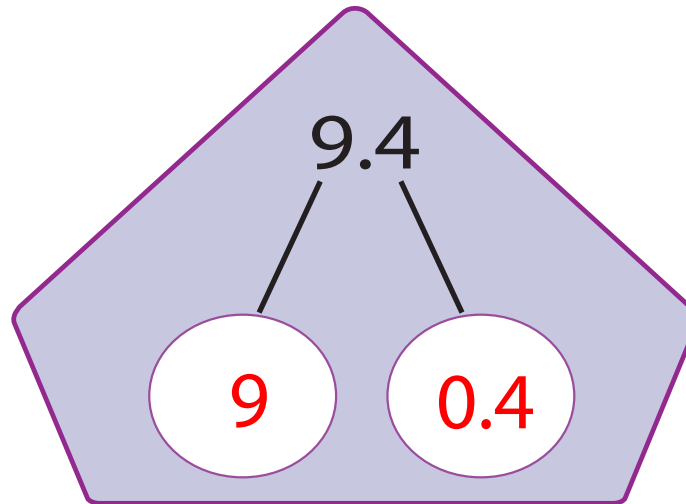
$418 \div 38 = 11$

Name: _____

$$\begin{array}{r} 73 \times 10 = \\ \hline 730 \\ 940 \div 10 = \\ \hline 94 \end{array}$$

BIG MATHS BEAT THAT!

$59 \div 3 = 19 \text{ r } 2$



$43 + 57 = 100$

$70 \times 50 =$

3500

$381 + 532 =$

913

$609 - 277 =$

332

$69 \times 4 =$

276

Answers



$$\frac{3}{4}$$

fraction

=

$$0.75$$

decimal

=

$$75\%$$

percentage

Name: _____

$$67 \times 100 =$$

$$6700$$

$$636 \div 10 =$$

$$63.6$$

BIG MATHS BEAT THAT!

Write three
factors of 40...

$$1, 2, 4$$

$$5, 8, 10$$

$$20, 40$$

$$601 \div 7 =$$

$$85 \text{ r } 6$$

$$36 \times 85 =$$

$$3060$$

$$862 + 138 = 1000$$

$$8.6 \times 7 =$$

$$60.2$$

$$8.86 + 7.97 =$$

$$16.83$$

$$6.77 - 2.86 =$$

$$3.91$$

Answers

$36 \div 8 =$
4.6

$\frac{3}{5}$

fraction

=

0.6

decimal

=

60%

percentage

BIG MATHS BEAT THAT!

Name: _____

$8.08 \times 1000 =$

8080

$31.9 \div 1000 =$

0.0319

Write these numbers in order...

1.91

1.9

1.19

1.119

1.9

1.119

1.91

1.19

$704 \div 22 =$

32

$439 \times 81 =$

35559

$54.4 + 45.6 = 100$

$22.2 + 5.98 =$

28.18

$17.3 - 5.55 =$

11.75

$3.77 \times 7 =$

26.39

Answers

Week Nine

Answers

7

$$5 + 2 = 7$$

Name: _____

How many bananas?

6

BIG MATHS BEAT THAT!

Write these numbers in order

6	4	5
4	5	6

$$6 + 4 = 10$$

1 more than 5 is?

6

Double 3 is

6

8 take away 6 is...

2

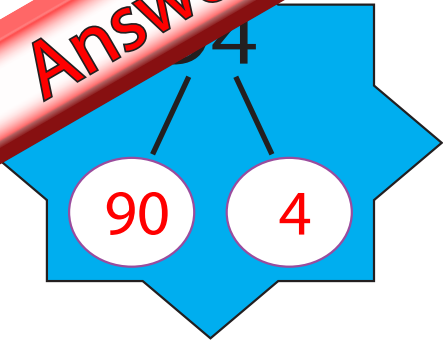
$$5 + 3 =$$

8

Half of 6 is...

3

Answers



Write out the fact family for:

$5 + 8 = 13$

$13 - 5 = 8$

$8 + 5 = 13$

$13 - 8 = 5$

Name: _____

$60 + 30 =$

90

BIG MATHS BEAT THAT!

Draw a ring around the **odd** numbers

55 20 7 63

$4 \times 3 =$

12

Double 6 is

12

$33 + 7 = 40$

$46 + 6 =$

52

$52 - 4 =$

48

Half of 14 is...

7

Answers

900 10 1

Write out the fact family for:

$66 + 19 = 85$

$85 - 19 = 66$

$19 + 66 = 85$

$85 - 66 = 19$

Name: _____

$$\begin{array}{r} 58 \times 10 = \\ \hline 580 \end{array}$$
$$\begin{array}{r} 630 \div 10 = \\ \hline 63 \end{array}$$

BIG MATHS BEAT THAT!

$63 \div 4 = 15 \text{ r } 3$

$20 \times 80 =$

1600

4.5

4

0.5

$38 + 62 = 100$

$239 + 475 =$

714

$828 - 356 =$

472

$58 \times 9 =$

522

Answers

1.884

4 0.8 0.08 0.004

$\frac{1}{10} = 0.1 = 10\%$

fraction decimal percentage

Name: _____

$69 \times 100 = 6900$

$418 \div 10 = 41.8$

BIG MATHS BEAT THAT!

Write a multiple of 7 between 55 and 65

56 or 63

$98 \times 76 =$

7448

$857 + 143 = 1000$

$119 \div 6 =$

19 r 5

$3.4 \times 4 = 13.6$

$4.44 + 9.66 =$

14.1

$5.16 - 3.53 =$

1.63

Answers

$6 \div 6 =$

9.6

$\frac{6}{10}$

fraction

=

0.6

decimal

=

60%

percentage

BIG MATHS BEAT THAT!

Name: _____

$8.68 \times 1000 =$

8680

$22.5 \div 1000 =$

0.0225

Write these numbers in order...

8.7

0.87

0.807

0.77

8.7

0.87

0.77

0.807

$935 \div 17 =$

55

$532 \times 89 =$

47348

$5.6 + 4.4 = 10$

$5.4 + 16.86 =$

22.26

$6.6 - 5.88 =$

0.72

$8.05 \times 8 =$

64.4

Answers

Week Ten

Answers

8



+



=

6

Name: _____

How many leavess?



7

BIG MATHS BEAT THAT!

Write these numbers in order

7

9

2

2

7

9

1 less than 9 is?

8

Double 1 is

2

9

+

1

=

10

8 take away 6 is...

2

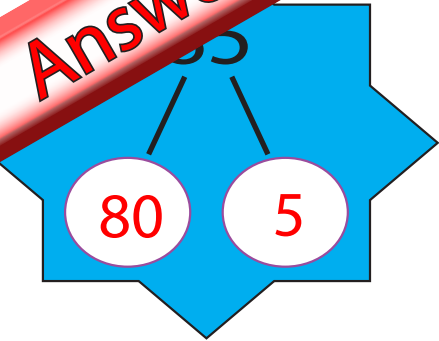
3 + 5 =

8

Half of 12 is...

6

Answers



Write out the fact family for:

$8 + 4 = 12$

$12 - 4 = 8$

$4 + 8 = 12$

$12 - 8 = 4$

Name: _____

$90 + 30 =$

120

BIG MATHS BEAT THAT!

Draw a ring around the **even** numbers

24 75 40 13

$6 \times 3 =$

18

Double 8 is

16

$65 + 5 = 70$

Half of 18 is...

9

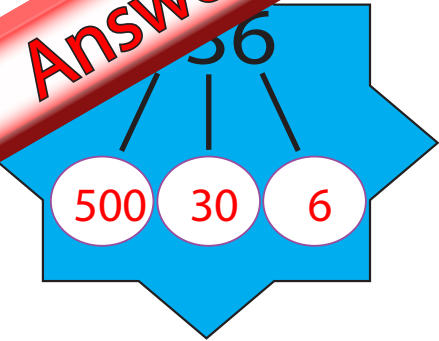
$94 + 7 =$

101

$31 - 8 =$

23

Answers



Write out the fact family for:

$41 \times 12 = 492$

$492 \div 41 = 12$

$12 \times 41 = 492$

$492 \div 12 = 41$

Name: _____

$$\begin{array}{r} 76 \times 10 = \\ 930 \div 10 = \end{array}$$

760
93

BIG MATHS BEAT THAT!

$71 \div 5 = 14 \text{ r } 1$

$50 \times 40 =$

2000

2.9

2

0.9

$74 + 26 = 100$

$529 + 447 =$

976

$645 - 278 =$

367

$87 \times 6 =$

522

Answers

6.305

6 0.3 0.00 0.005

$\frac{1}{2}$ = 0.5 = 50%

fraction decimal percentage

Name: _____

$36 \times 100 = 3600$

$479 \div 10 = 47.9$

BIG MATHS BEAT THAT!

Write a square number between 50 and 70

64

$44 \times 66 =$

2904

$232 + 768 = 1000$

$329 \div 5 =$

65 r 4

$6.4 \times 3 = 19.2$

$5.09 + 9.95 =$

15.04

$3.27 - 2.57 =$

0.7

Answers

$2 \div 4 =$

3.8

$\frac{9}{10} =$

fraction

=

$0.9 =$

decimal

=

90%

percentage

BIG MATHS BEAT THAT!

Name: _____

$4.38 \times 1000 =$

4380

$199 \div 1000 =$

0.0199

Write these numbers in order...

4.5

4.055

4.05

4.04

4.5

4.055

4.05

4.04

$682 \div 11 =$

62

$461 \times 63 =$

29043

$66.6 + 33.4 = 100$

$34.1 + 7.34 =$

41.44

$11.1 - 8.88 =$

2.22

$6.89 \times 3 =$

20.67